

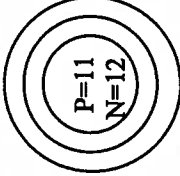




BOHR DIAGRAM WORKSHEET

NAME: _____

Draw and complete the following Bohr Diagrams for the first twenty elements. Some have been set-up for you. Label the families and number of valence electrons in each group.

 <p>H-1</p>	 <p>Li-7</p>	 <p>Na-23</p>	 <p>K-39</p>	 <p>He-4</p>			
	<p>Be-9</p>	<p>B-11</p>	<p>Mg-24</p>		<p>C-12</p>	<p>N-14</p>	<p>P-31</p>
					<p>O-16</p>	<p>F-19</p>	<p>Cl-35</p>
						<p>Ne-20</p>	<p>Ar-40</p>

