

**Analyzing Information**  
**Analyzing position-time graphs**  
**Page 158**

1. (a)

Time Interval	Displacement	Average Velocity
0 s–2 s	0 m	0 m/s
2 s–5 s	–3 m	–1 m/s
5 s–7 s	+ 5 m	+ 2.5 m/s
7 s–12 s	0 m	0 m/s
12 s–14 s	–8 m	–4 m/s
14 s–16 s	+ 4 m	+ 2 m/s
16 s–18 s	0 m	0 m/s
18 s–19 s	+ 2 m	+ 2 m/s
19 s–20 s	0 m	0 m/s

(b) at 14 seconds

(c) 0 m

2. (a) C

(b) E

(c) B

(d) D

(e) F

(f) A

3. (a) The y-intercept represents the position at which the runner starts.

(b) No. Runner B starts out farther ahead than Runner A.

(c) Runner B is running faster at 2 s because Runner B has a steeper slope than Runner A.

(d) At 5 s, both runners are at the same position.

(e) Runner A is ahead at 10 s.

**Extension Activity**

**Constructing and interpreting position-time graphs**

**Page 160**

1. (a) Graph should have a negative slope crossing the x-axis at 5 s.

(b) 3 seconds

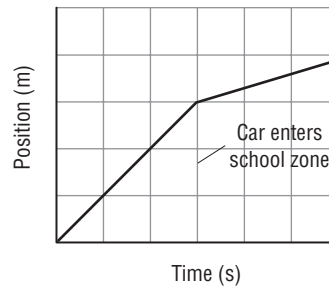
(c) 100 m [E]

(d) –12.5 m [W]

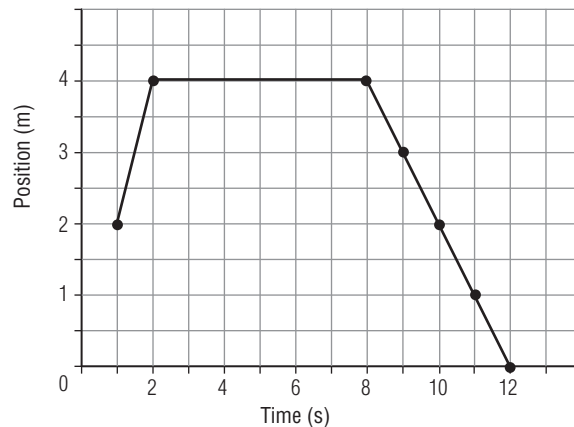
(e) –25 m/s

(f) The car is moving westward toward the origin with constant velocity.

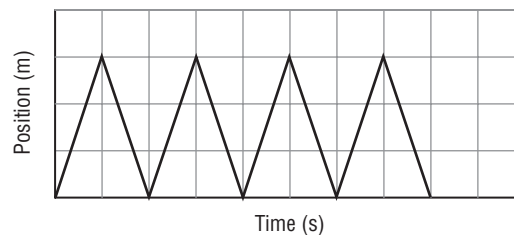
2. (a)



(b)



(c)



**Assessment**

**Average velocity**

**Page 162**

1. B 2. C 3. A 4. D 5. A 6. A 7. B 8. D 9. C 10. B 11. C  
 12. C 13. D 14. A

**Chapter 9 Acceleration is the rate of change in velocity.**

**Section 9.1 Describing Acceleration**

**Cloze Activity**

**Velocity and acceleration**

**Page 166**

- vector, speed
- positive
- negative

4. constant velocity
5. velocity
6. positive acceleration
7. negative acceleration
8. same direction
9. opposite direction
10. deceleration

### Applying Knowledge

#### Calculating change in velocity Page 167

1.

$\vec{v}_i$	$\vec{v}_f$	$\Delta\vec{v}$	Description of $\Delta\vec{v}$
+ 14 m/s	+ 5 m/s	-9 m/s	object is slowing down
+ 8 m/s	<b>+8 m/s</b>	0 m/s	object is in uniform motion
<b>+13 m/s</b>	+ 25 m/s	+ 12 m/s	object is speeding up
+ 20 m/s	-30 m/s	<b>-50 m/s</b>	object is slowing down
-38 m/s	<b>-48 m/s</b>	-10 m/s	object is slowing down
<b>-16 m/s</b>	-16 m/s	0 m/s	object is in uniform motion
-3 m/s	+ 22 m/s	<b>+ 25 m/s</b>	object is speeding up

2. (a) + 15 m/s
- (b) + 13 m/s
- (c) 0 m/s
- (d) - 6 m/s
- (e) - 10 m/s

### Interpreting Illustrations

#### Positive, negative, and zero acceleration Page 168

1. (a) positive acceleration
- (b) zero acceleration
- (c) negative acceleration
- (d) zero acceleration
2. (a) positive acceleration
- (b) negative acceleration
- (c) positive acceleration
- (d) negative acceleration
- (e) zero acceleration
- (f) positive acceleration

### Assessment

#### Describing acceleration Page 169

1. A 2. B 3. C 4. D 5. A 6. B 7. B 8. A 9. D

## Section 9.2 Calculating Acceleration

### Applying Knowledge

### Calculating acceleration

#### Page 172

1. (a)  $\Delta\vec{a} = \frac{\Delta v}{\Delta t}$
- (b)  $\Delta v = a\Delta t$
- (c)  $\Delta t = \frac{\Delta v}{a}$
- 2.

Change in Velocity	Time	Acceleration	Formula Used and Calculation Shown
140 m/s	8 s	17.5 m/s <sup>2</sup>	$\vec{a} = \frac{\Delta v}{\Delta t} = \frac{140}{8} = 17.5 \text{ m/s}^2$
-60 km/h	4 h	<b>-15 km/h<sup>2</sup></b>	$\vec{a} = \frac{\Delta v}{\Delta t} = \frac{-60}{4} = -15 \text{ km/h}^2$
120 km/h	<b>2.5 h</b>	48 km/h <sup>2</sup>	$t = \frac{v}{a} = \frac{120}{48} = 2.5 \text{ h}$
<b>-52.5 m/s</b>	15 s	-3.5 m/s <sup>2</sup>	$\vec{v} = \vec{a} t = (-3.5)(15) = -52.5 \text{ m/s}$
12 m/s	2.5 s	<b>4.8 m/s<sup>2</sup></b>	$\vec{a} = \frac{\Delta v}{\Delta t} = \frac{12}{2.5} = 4.8 \text{ m/s}^2$
-25 m/s	<b>2 s</b>	-12.5 m/s <sup>2</sup>	$\vec{a} = \frac{\Delta v}{\Delta t} = \frac{12}{2.5} = 4.8 \text{ m/s}^2$
<b>48 km/h</b>	9.6 h	5 km/h <sup>2</sup>	$\vec{v} = \vec{a} t = (5)(9.6) = 48 \text{ km/h}$

3. (a) 7.8 m/s<sup>2</sup> [north]
- (b) 6 m/s [forward]
- (c) 1.52 s
- (d) +1700 m/s

### Analyzing Information

#### Analyzing velocity-time graphs Page 173

1. (a) acceleration
- (b) positive velocity
- (c) negative velocity
- (d) positive acceleration
- (e) negative acceleration
- (f) constant velocity; zero acceleration
- (g) zero velocity
- 2.

MOTION OF A BALL			
Time Interval	Slope	Acceleration	Velocity
<b>0 s - 2 s</b>	positive	positive	positive
<b>2 s - 6 s</b>	zero	zero	positive
<b>6 s - 8 s</b>	negative	negative	positive
<b>8 s - 10 s</b>	zero	zero	zero

3. (a) ball starts from rest and increases its velocity at a constant rate, heading to the right
- (b) ball travels right at a constant velocity and has zero acceleration

- (c) ball slows down to a stop at a constant rate, while still travelling to the right  
 (d) ball is at rest (it has stopped)

**Illustrating Concepts**

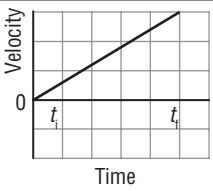
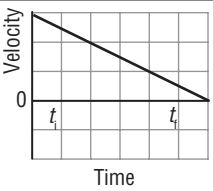
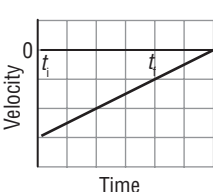
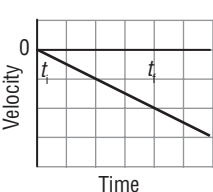
**Sketching and interpreting velocity-time graphs**

Page 174

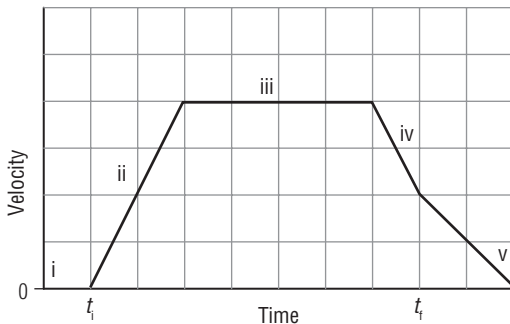
1.

	Graph A	Graph B	Graph C
<b>Slope</b>	zero	positive	negative
<b>Acceleration</b>	zero acceleration	positive acceleration	negative acceleration

2.

	Positive Acceleration	Negative Acceleration
<b>Positive Velocity</b>		
<b>Negative Velocity</b>		

3. (a)



- (b) (i) zero slope  
 (ii) positive slope  
 (iii) zero slope  
 (iv) negative slope  
 (v) zero slope
- (c) (i) zero acceleration  
 (ii) positive acceleration  
 (iii) zero acceleration  
 (iv) negative acceleration  
 (v) zero acceleration

**Assessment**

**Calculating acceleration**

Page 176

1. D 2. A 3. B 4. C 5. A 6. B 7. D 8. B

**UNIT 4 Energy Transfer in Natural Systems**

**Chapter 10 The kinetic molecular theory explains the transfer of thermal energy.**

**Section 10.1 Temperature, Thermal Energy, and Heat**

**Illustrating concepts**

**Kinetic molecular theory and temperature**

Page 180

1. Kinetic energy is the energy of a particle or object due to its motion.

2.

	Solid	Liquid	Gas
spaces between particles	very close	farther apart	even farther apart
movement of particles	vibrate slowly	move faster	move even faster
kinetic energy of particles	very little	increases	increases as collisions increase

3. Temperature is a measure of the average kinetic energy of all the particles in a sample of matter.
4. Hot water: Drawing should show long arrows (see textbook page 425, figure 10.2).  
 Cold water: Drawing should show shorter arrows (see textbook page 425, figure 10.2).

5.

	Fahrenheit	Celsius	Kelvin
absolute zero	-459° F	-273°C	0 K
water freezes	32°F	0°C	273 K
water boils	212°F	100°C	373 K

**Comprehension**

**Thermal energy, kinetic energy, potential energy**  
 Page 181

1. Thermal energy is the total energy of all the particles in a solid, liquid, or gas.
2. Kinetic energy is the energy of a particle or an object due to its motion.
3. Potential energy is the stored energy of an object or particle, due to its position or state.